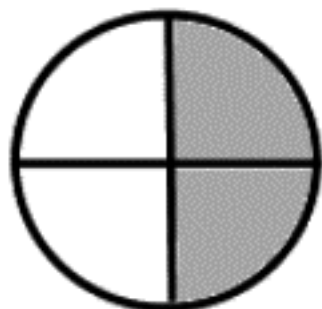
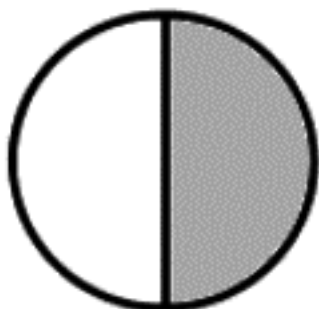


# Pie Fractions

Circle the correct pie fraction answer for the pies below.



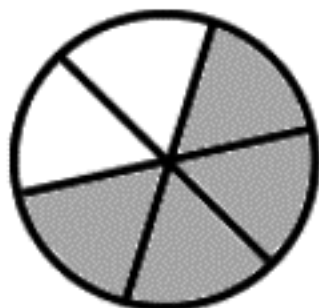
$\frac{2}{8}$     $\frac{2}{4}$     $\frac{2}{6}$




$\frac{1}{8}$     $\frac{1}{4}$     $\frac{1}{2}$



$\frac{1}{8}$     $\frac{1}{4}$     $\frac{1}{6}$



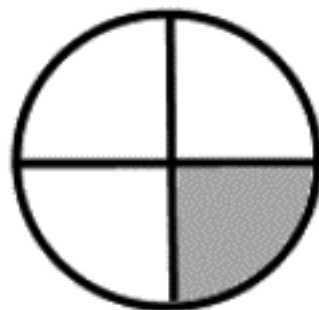
$\frac{4}{8}$     $\frac{4}{4}$     $\frac{4}{6}$



$\frac{1}{1}$     $\frac{1}{4}$     $\frac{1}{6}$



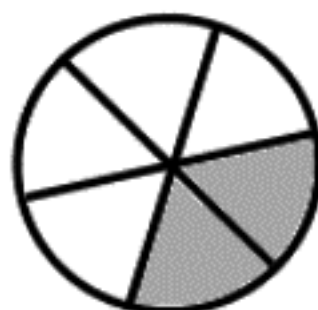
$\frac{3}{8}$     $\frac{3}{4}$     $\frac{3}{6}$



$\frac{1}{8}$     $\frac{1}{4}$     $\frac{1}{6}$



$\frac{5}{8}$     $\frac{5}{4}$     $\frac{5}{16}$



$\frac{2}{8}$     $\frac{2}{4}$     $\frac{2}{6}$